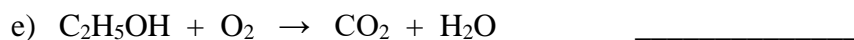
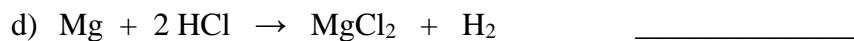
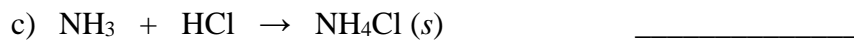
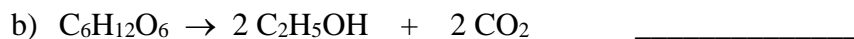
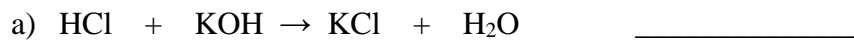


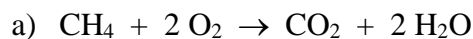
Name: _____

Chem4Bio Module 5 Worksheet

1. **Classify** each of the reactions below as a **synthesis**, **decomposition**, **exchange**, or **combustion** reaction.

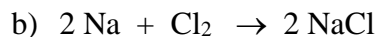


2. Consider the following Redox reactions. For each reaction, identify the **oxidizer (oxidizing agent)** and the **reducer (reducing agent)**:



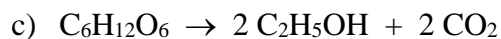
Oxidizer is: _____

Reducer is: _____



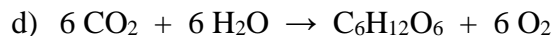
Oxidizer is: _____

Reducer is: _____



Oxidizer is: _____

Reducer is: _____



Oxidizer is: _____

Reducer is: _____